

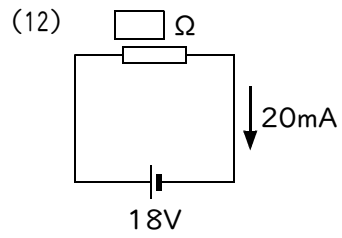
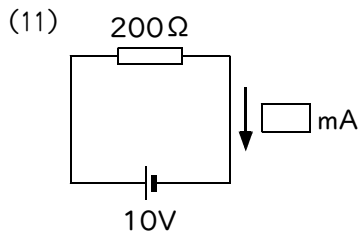
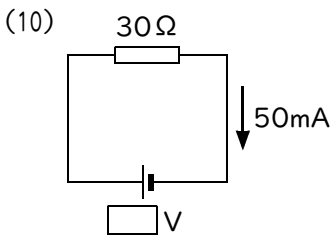
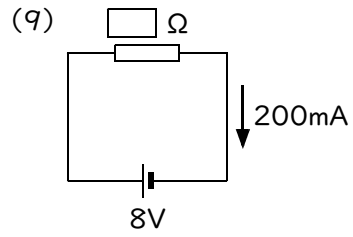
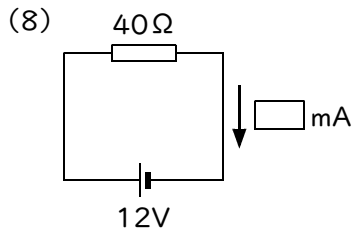
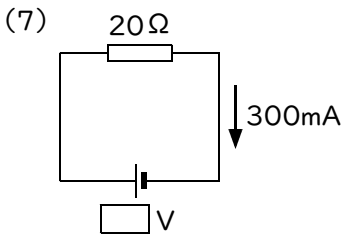
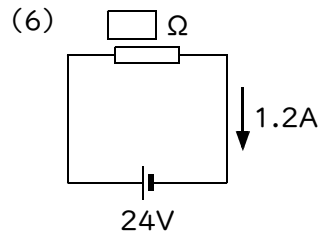
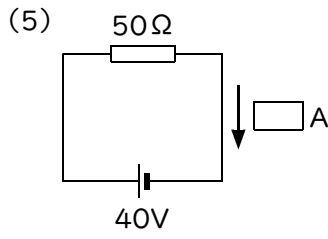
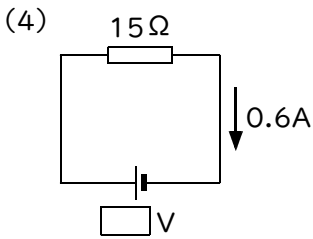
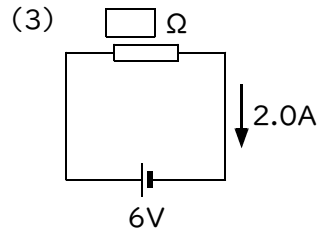
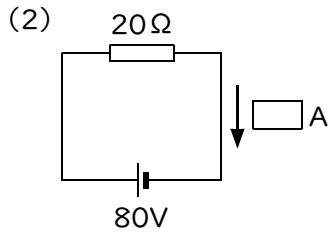
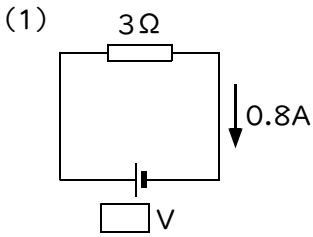
# 確認テスト

34

名前

得点

1 次の図の  にあてはまる数字を、それぞれ答えなさい。



(1)	V ⑧	(2)	A ⑧	(3)	$\Omega$ ⑨
(4)	V ⑧	(5)	A ⑧	(6)	$\Omega$ ⑨
(7)	V ⑧	(8)	mA ⑧	(9)	$\Omega$ ⑨
(10)	V ⑧	(11)	mA ⑧	(12)	$\Omega$ ⑨

# 確認テスト

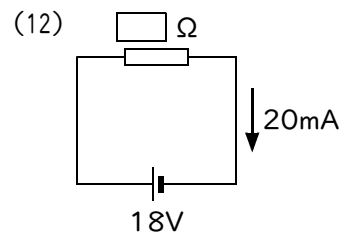
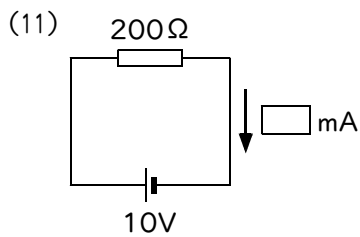
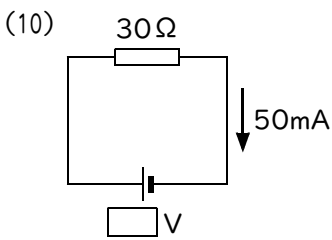
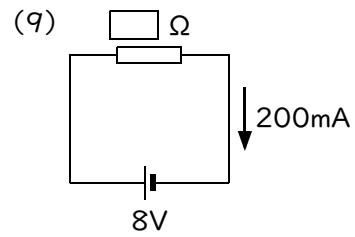
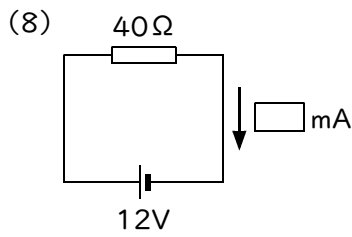
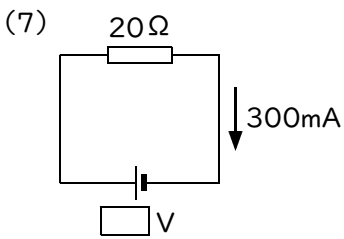
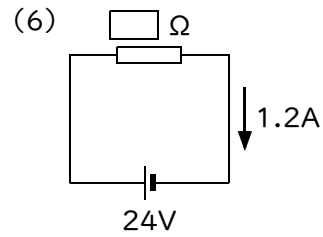
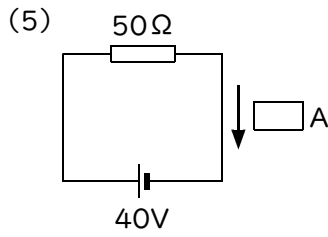
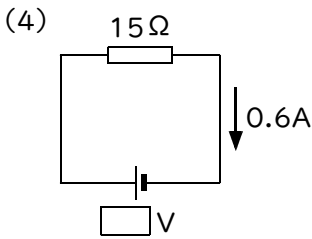
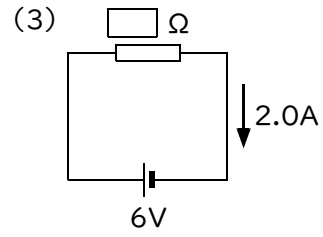
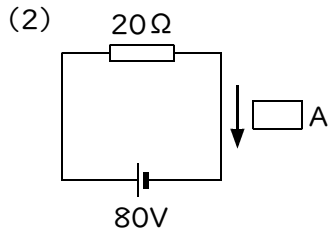
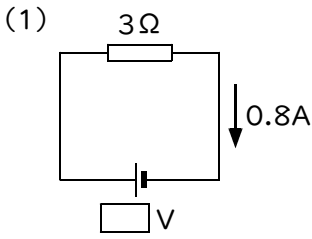
34

名前

解答

得点

① 次の図の  にあてはまる数字を、それぞれ答えなさい。



(1)	2.4	V	(2)	4	A	(3)	3	$\Omega$
(4)	9	V	(5)	0.8	A	(6)	20	$\Omega$
(7)	6	V	(8)	300	mA	(9)	40	$\Omega$
(10)	1.5	V	(11)	50	mA	(12)	900	$\Omega$